

Name: \_\_\_\_\_

# Fact Family Arrays

Write the fact family shown by each array.

**ejemplo**

○ ○ ○ ○ ○  
○ ○ ○ ○ ○  
○ ○ ○ ○ ○

---

$3 \times 5 = 15$

---


$5 \times 3 = 15$

---

$15 \div 3 = 5$

---

$15 \div 5 = 3$



---

---

---

---



---

---


---

---



# ~ PREVIEW ~

Please log in or register to download the printable version of this worksheet.




---

---

---

---




---

---

---

---



---

---

---


---

# ANSWER KEY

## Fact Family Arrays

Escribe una familia de operaciones mostrada por cada matriz.


ejemplo



$$3 \times 5 = 15$$

$$5 \times 3 = 15$$

$$15 \div 3 = 5$$



$$4 \times 7 = 28$$

$$7 \times 4 = 28$$

$$28 \div 4 = 7$$



$$4 \times 5 = 20$$

$$5 \times 4 = 20$$

$$20 \div 4 = 5$$



# ~ PREVIEW ~

Please log in or register to download the printable version of this worksheet.